

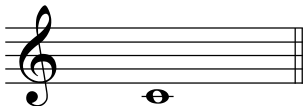
Chromatic Intervals IV

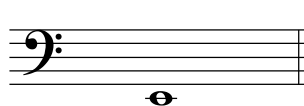
(Major, Minor, Perfect, Augmented and Diminished Intervals)


Write the note above the given note which completes the interval.

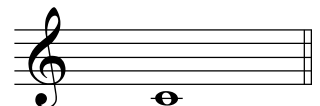
Example 


Aug 5


1 
M6


2 
M7


3 
m7


4 
dim 5


5 
m3

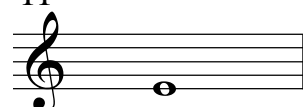
6 
dim 4


7 
M6


8 
P8


9 
M3


10 
Aug 5


11 
m6


12 
M6

13 
M2


14 
m2

15 
m3


16 
m7


17 
M3


18 
Aug 4


19 
P5

20 
Aug 8

21 
P4

22 
M2

23 
m3

24 
M3